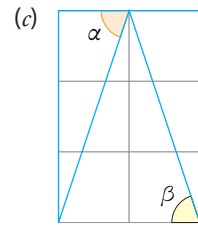
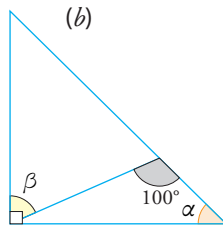
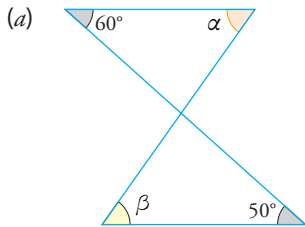
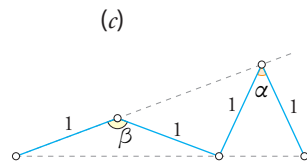
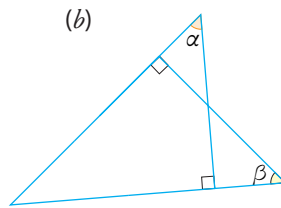
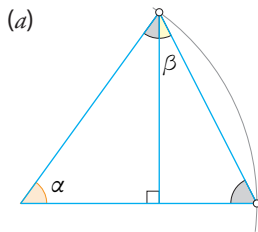


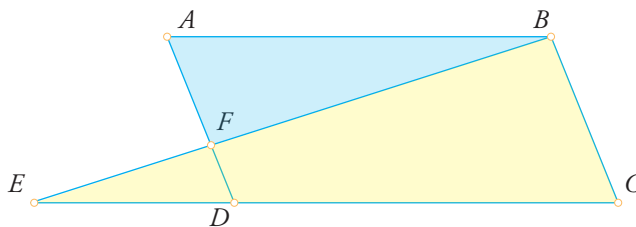
20 Exprimer l'angle α en fonction de β .



21 Exprimer l'angle α en fonction de β .



22 Soit $ABCD$ un parallélogramme. Montrer que les triangles BCE et ABF sont semblables.



23 Calculer la valeur de l'angle α .

